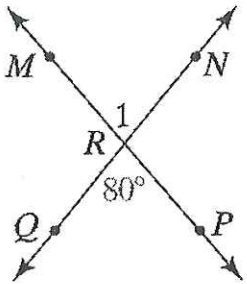


Angle Relationships Versatile

NAME _____

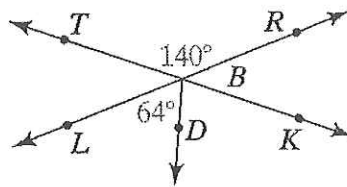
Problems



1. $m\angle MRN =$

2. $m\angle MRQ =$

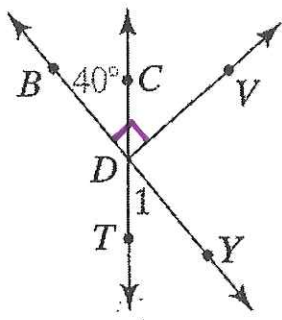
3. $m\angle MRP =$



7. $m\angle RBK =$

8. $m\angle KBD =$

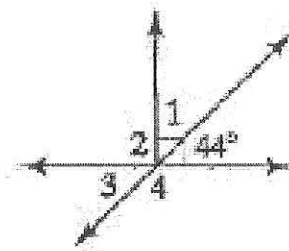
9. $m\angle RBD =$



4. $m\angle CDV =$

5. $m\angle BDT =$

6. $m\angle VDY =$



10. $m\angle 1 =$

11. $m\angle 3 =$

12. $m\angle 4 =$

Answers

a. 40°

b. 46°

c. 44°

d. 140°

e. 136°

f. 76°

g. 50°

h. 80°

i. 116°

j. 180°

k. 90°

l. 100°

