

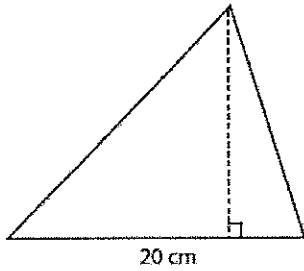
Find the Missing Side Length

Name: _____

7th Grade Math

Find the Missing Height

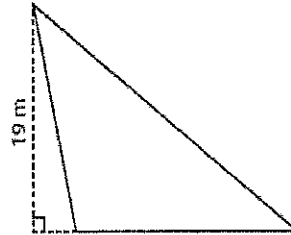
1.



Area = 180 cm

Height =

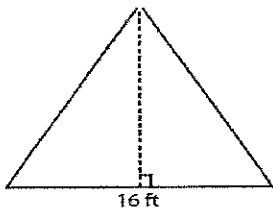
2.



Area = 228 m

Base =

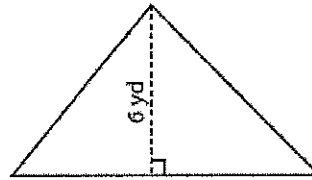
3.



Area = 152 ft

Height =

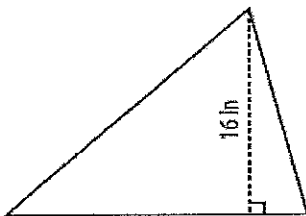
4.



Area = 42 yd

Base =

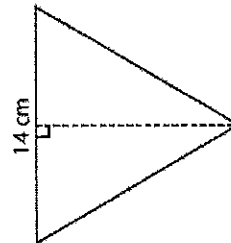
5.



Area = 96 in

Base =

6.



Area = 112 cm

Height =