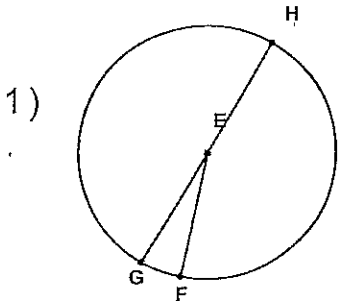


Identifying a Circle

Name: _____

7th Grade Math

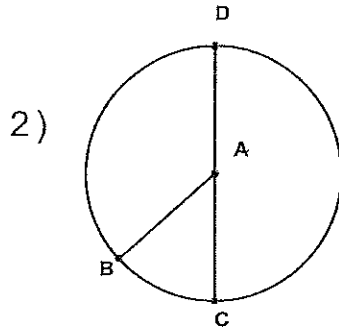
Identify the elements for each problem.



Circle: _____

Radius: _____

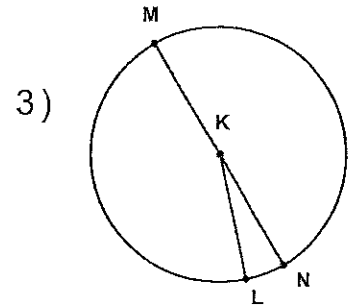
Diameter: _____



Circle: _____

Radius: _____

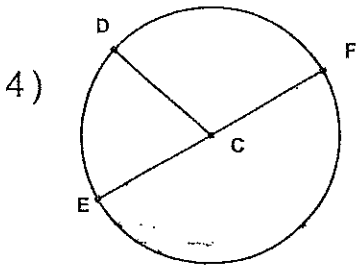
Diameter: _____



Circle: _____

Radius: _____

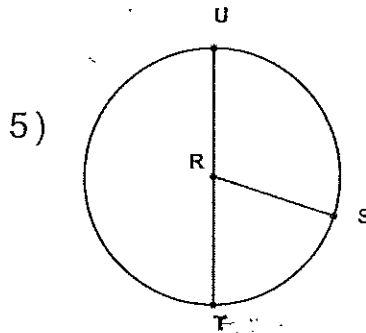
Diameter: _____



Circle: _____

Radius: _____

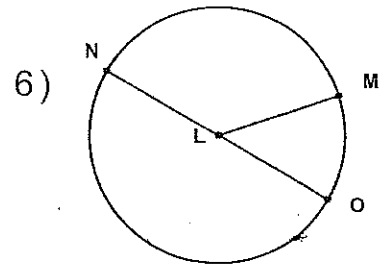
Diameter: _____



Circle: _____

Radius: _____

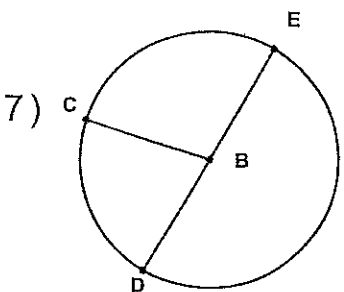
Diameter: _____



Circle: _____

Radius: _____

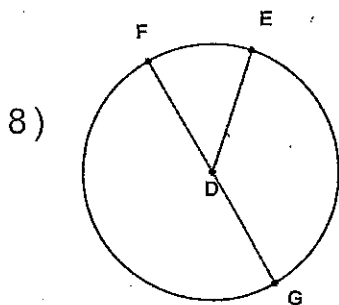
Diameter: _____



Circle: _____

Radius: _____

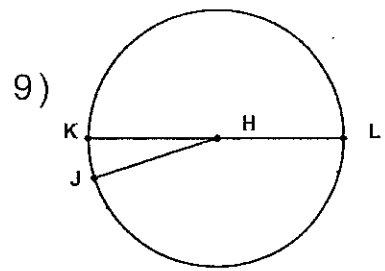
Diameter: _____



Circle: _____

Radius: _____

Diameter: _____



Circle: _____

Radius: _____

Diameter: _____

