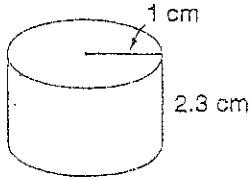


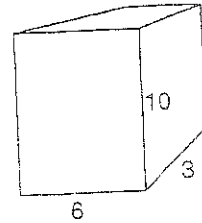
More Volume and Prism Practice

Find the volume of the following prisms.

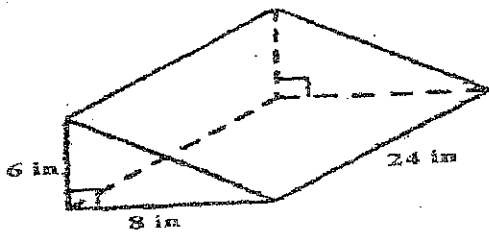
1) Shape of the base = _____



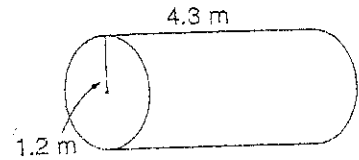
2) Shape of the base = _____



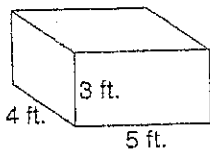
3) Shape of the base = _____



4) Shape of the base = _____



5) Shape of the base = _____



6) Shape of the base = _____

