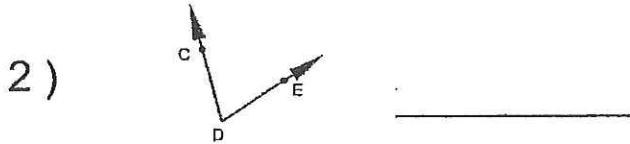


Naming \angle 's

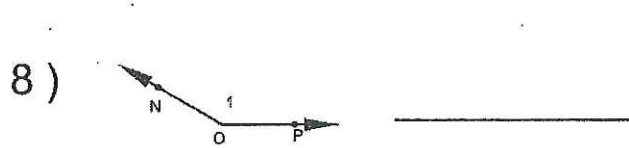
Name: _____

7th Grade Math

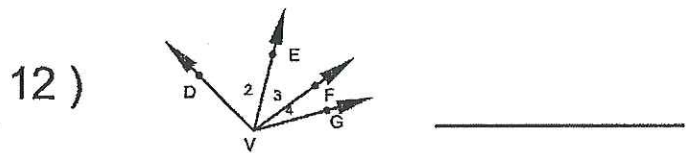
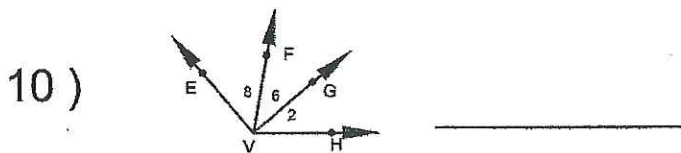
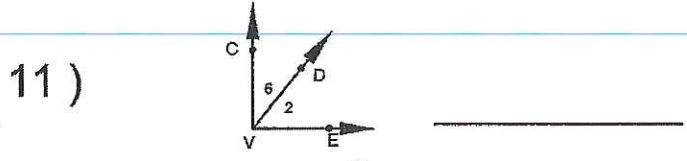
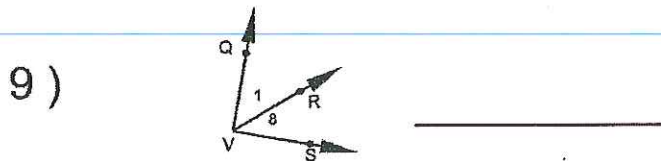
Name the vertex and sides of each angle



Name each angle 4 ways



Name each angle that has V as a vertex



Classifying \angle 's

Name: _____

7th Grade Math

Classify each angle as acute, obtuse, right, or straight

1)



6)



2)



7)



3)



8)



4)



9)



5)



10)



11) 166°

16) 70°

12) 108°

17) 21°

13) 180°

18) 163°

14) 87°

19) 19°

15) 90°

20) 134°

Three Types of Angles

Acute, Obtuse, and Right Angles

Name each angle 2 ways, then label each angle as acute, obtuse, or right.

