

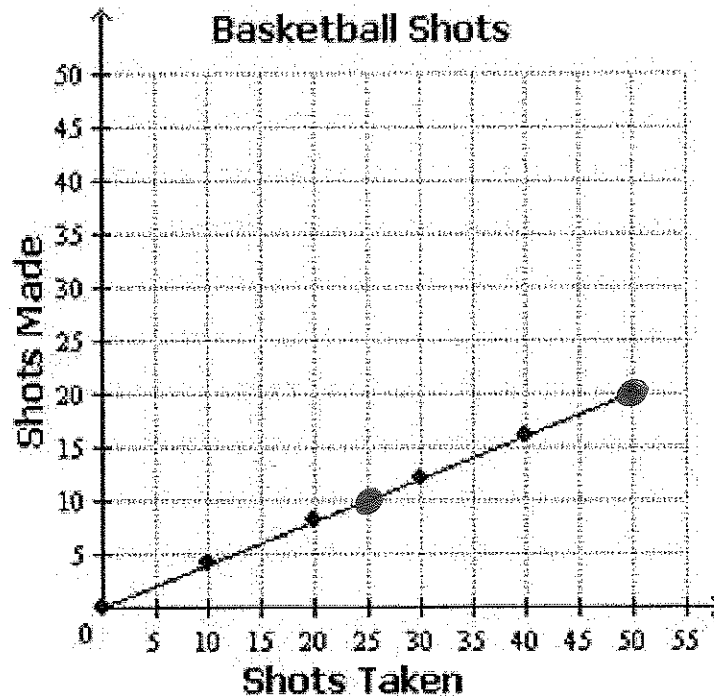
Review: Rates, Ratios, & Proportions

NAME _____

Directions:

- Round all answers to the nearest tenth, except when the answer is representing money!

Use the graph below to answer the following questions...



1. Which of the following statements describe the graph? **Select all that apply.**

- a. If 25 shots were taken, 10 were made.
- b. If 20 shots were made, 40 were taken.
- c. If 0 shots were taken, 0 shots were made.
- d. If 20 shots are taken, less than 10 will be made.
- e. If 30 shots are taken, more than 15 shots will be made.

2. Select the statement about the graph that is **not true**.

- a. The point (0, 0) shows that 0 shots taken results in 0 shots made.
- b. The point (50, 20) shows that 20 shots taken results in 50 shots made.
- c. The point (40, 16) shows that if 40 shots are taken, 16 are made.

3. Select all of the ordered pairs that would also lie on the line above?

- a. (60, 30)
- b. (75, 30)
- c. (100, 50)
- d. (100, 40)

4. If 125 shots are taken, that means that _____ shots will be made.

5. For each of the following...

- Circle whether it is proportional or not.
- If they are proportional find the unit rate (Be sure to include units if you can).
- If they are proportional, write the equation.

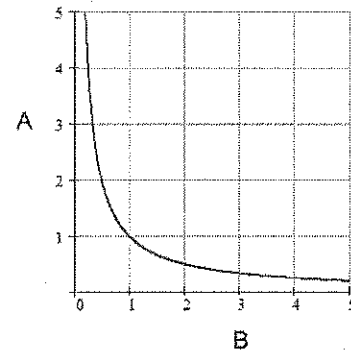
a. Proportional or NOT?

X	Y
9	72
8	64
7	56
5	40

Unit Rate: _____

Equation: _____

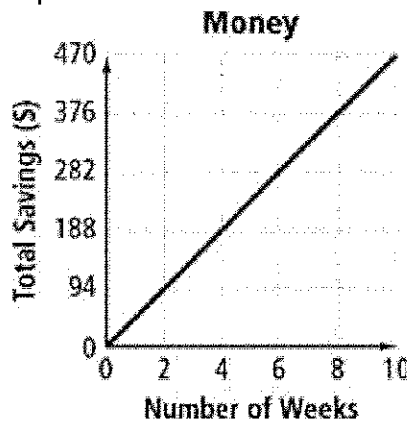
b. Proportional or NOT?



Unit Rate: _____

Equation: _____

c. Proportional or NOT?



Unit Rate: _____

Equation: _____

d. Proportional or NOT?

X	Y
2	7
3	8
4	9
5	10

Unit Rate: _____

Equation: _____

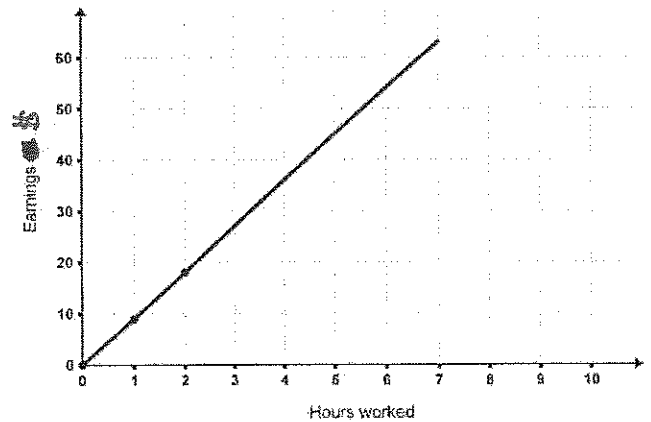
e. Proportional or NOT?

X	Y
0	0
10	20
40	20
30	60

Unit Rate: _____

Equation: _____

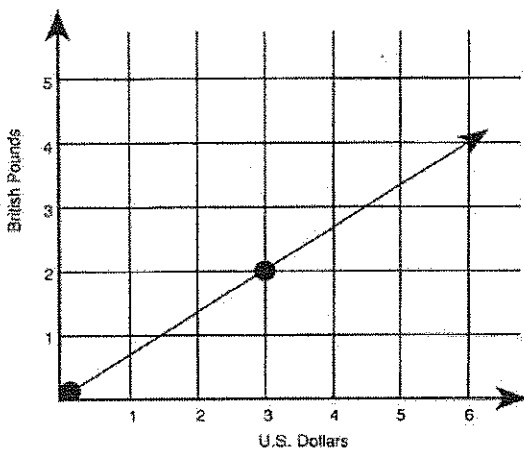
f. Proportional or NOT?



Unit Rate: _____

Equation: _____

g. Proportional or NOT?



Unit Rate: _____

Equation: _____

h. Proportional or NOT?

X	Y
8	6
12	9
16	12
20	15

Unit Rate: _____

Equation: _____

6. Determine whether or not each of the following is a proportion. Show evidence to support your answer.

a. $\frac{2}{3} = \frac{12}{18}$

b. $\frac{4}{5} = \frac{8}{12}$

c. $\frac{6}{7} = \frac{3}{4}$

7. Solve each of the proportions below...

a. $\frac{x}{3} = \frac{5}{6}$

b. $\frac{4}{7} = \frac{x}{12}$

c. $\frac{2}{7} = \frac{3}{x}$

For each of the following, write a proportion and then solve.

8. According to the label there are 215 calories in a Snickers candy bar. How many calories are there is 6 candy bars?

Proportion

9. Clarence paid \$3.21 in tax for 5 hats. At this rate, what would the tax be if he bought 3 hats?

Proportion

10. DeMarius drove 190 miles in 3 hours. At that rate, how long would it take DeMarius to drive 320 miles?

Proportion

11. Alicia is making cupcakes for a party she is having and wants to make sure everyone gets at least one cupcake. The recipe calls for $\frac{1}{2}$ of a teaspoon of salt for every batch (21 cupcakes). If Alicia is having a party with 84 people attending, how many teaspoons of salt will Alicia use?

Proportion

12. Dominique walks $\frac{3}{5}$ of a mile in $\frac{1}{4}$ of an hour. Her friend, Melissa, walks for $\frac{2}{3}$ of an hour. Melissa states that she walked x miles and walked at the same rate as Dominique. What value of x would make Melissa's statement true?

Proportion

13. A mixture of paint calls for $\frac{3}{5}$ of a cup of red paint and $\frac{4}{5}$ cups of yellow paint. How many cups of red paint would be needed for every 1 cup of yellow paint?

Proportion

14. Xavier decided to run $3\frac{1}{4}$ miles after school. He runs at a pace of $8\frac{1}{2}$ miles per hour. How long will it take Xavier to do the run?

Proportion

Use the chart below to convert the following units...

Conversions

1 hour = 3600 seconds

1 meter = 3.28 feet

1 quart = 0.946 liters

1 inch = 2.54 cm = 25.4 mm

1 mile = 5280 feet

1 km = 0.62 miles

1 foot = 12 inches

16 oz = 1 lb

1 yard = 3 feet

1 kg = 2.2 lbs

15. 3005 feet into miles

16. 65 kilograms into pounds

17. 59 cm into inches

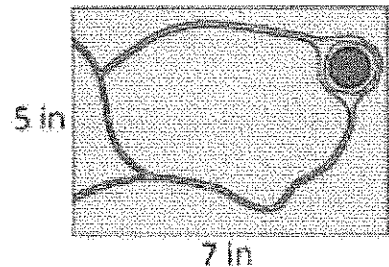
18. 148 ounces into pounds

Solve each problem below.

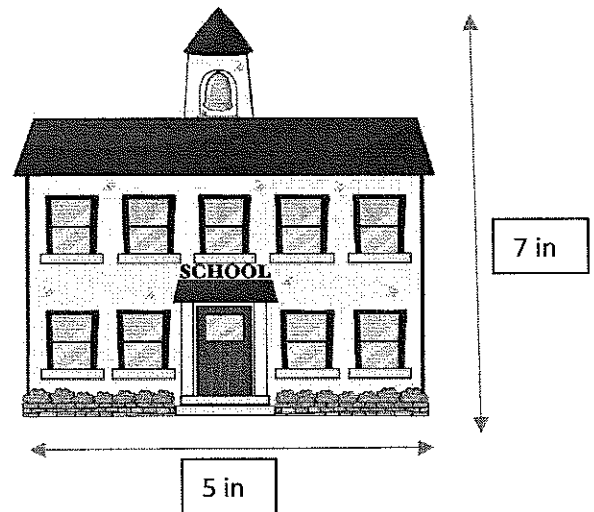
19. A toy manufacturer is going to produce a toy that is a scale model of the giant robot in a super hero movie, where 1 cm = 6 feet. If the robot in the movie was 36 feet tall, what will be the height of the toy?

20. Matthew bought a scale model toy version of the space ship in his favorite science fiction television show. If the toy is constructed with the scale 1 inch = 12 feet and the toy is 1 foot 4 inches long, how long is the ship in the television show?

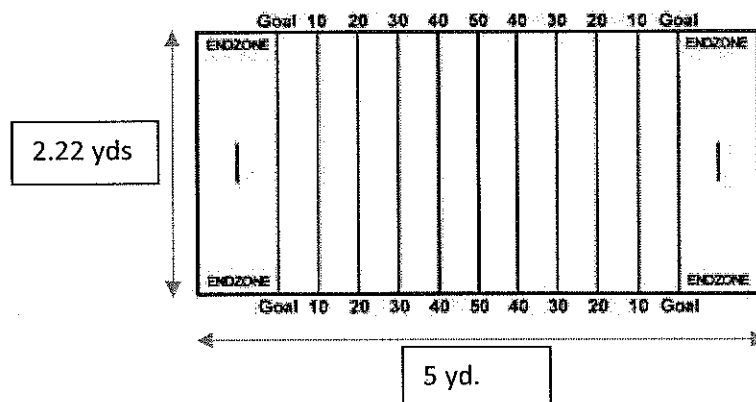
21. A scale drawing of a rectangular park is 5 inches wide and 7 inches long. The actual park is 140 yards long. What is the width of the actual park?



22. A scale replica of a school is pictured below. If the actual school is 32 yards long, what is the actual height of the school?



23. A coach created a scale model of a football field for his players and it is pictured below. If the image is scaled by a factor of 24, what are the actual width and length of a football field?



ANSWERS

1. A, C, D
2. B
3. B, D
4. 50 shots made
5. A. Proportional, $8, y = 8x$
B. NOT
C. Proportional, $\frac{\$47}{\text{week}}, y = 47x$
D. NOT
E. NOT
F. Proportional, $\frac{\$10}{\text{hr}}, y = 10x$
G. Proportional, $\frac{2 \text{ lbs}}{\$3}, y = \frac{2}{3}x$
H. Proportional, $\frac{3}{4}, y = \frac{3}{4}x$
6. A. Yes
B. NO
C. NO
7. A. $2 \frac{1}{2}$ or 2.5
B. $6 \frac{6}{7}$ or 6.9
C. $10 \frac{1}{2}$ or 10.5
8. 1290 calories
9. \$1.93
10. 5.1 hours
11. 2 tsp
12. $1 \frac{3}{5}$ or 1.6
13. $\frac{3}{4}$ cup or 0.75 cups
14. $\frac{13}{34}$ hrs or 0.4 hours
15. 0.6 miles
16. 143 lbs
17. 23.2 inches
18. 9.3 lbs
19. 6 cm
20. 192 ft.
21. 100 yds
22. 44.8 yds
23. Length = 120 yards, Width = 53.3 yards