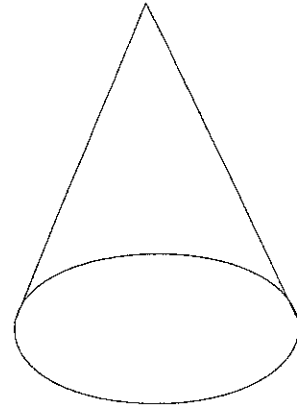


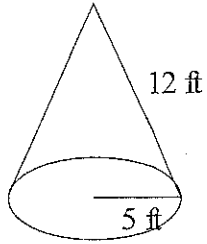
Surface Area of Cones

The formula for the surface area of a cone is...

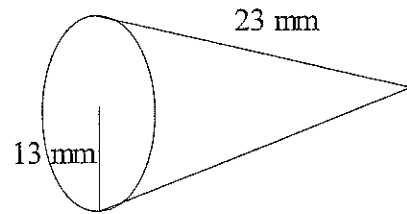


Find the surface area of each cone below...

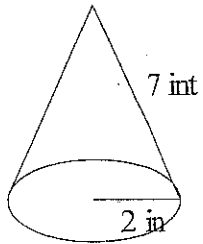
1.



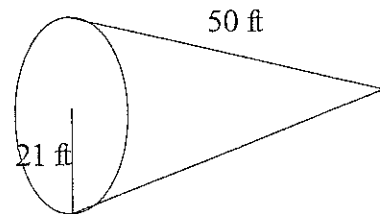
2.



3.



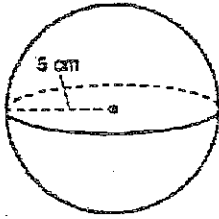
4.



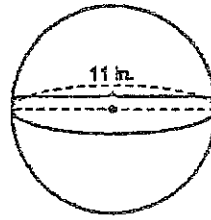
Surface Area - SPHERES

Find the surface area of each figure. Show your work for finding the area of each face and base.

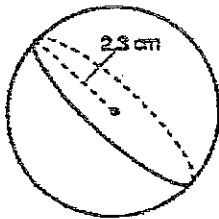
1.



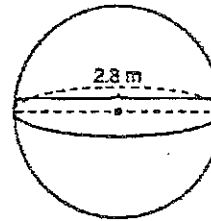
2.



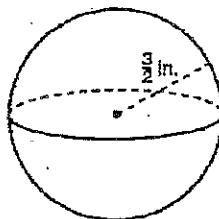
3.



4.



5.



6.

